




~You Dream , We care. A new way of learning...

**Ambitious baba**

[Facebook Page](#)

[Facebook Group](#)

[Telegram Group](#)



Reasoning, Quant, English  
PDF  
**Memory based  
IBPS PO PRE  
2018**  
Ambitious Baba

## Reasoning

### Coding decoding (5 questions)

Get details the venue - ro ta vu kj

Venue book for details - ta ac mn vu

Details required for guest- mn kj ac lh

Guest get more menu- lh tb qg bf

1. Question : What is the code of “details”.
2. Question: What is the code of “guest”

### Direction (3 questions)

Point A is 9km to south of point D which is 5 km east of F. Point B is 5km south of point H and 9km west of E. Point F is 8km east of point H. Point C lies to east of E and between A and D.

1. Question: What is the distance E and C?
2. Question: What is the direction of C from F?

### Inequality (5 question)

1

[Subscribe YouTube Channel](#) | [www.ambitiousbaba.com](http://www.ambitiousbaba.com)



[Facebook Page](#)

[Facebook Group](#)

[Telegram Group](#)

**Question 1: Which of the following expressions is true if the expression  $R < T = U > S > P \geq V$  is definitely true?**

- (A)  $S \leq P$
- (B)  $S < R$
- (C)  $U > V$
- (D)  $P < R$
- (E)  $V \leq S$

**Question 2: Which of the following symbols should be placed in the blank spaces respectively (in the same order from left to right) in order to complete the given expression in such a manner that both ' $M > P$ ' as well as ' $O \leq R$ ' definitely holds true?**

M \_ N \_ O \_ P \_ Q \_ R \_ S

- (A)  $>, >, \geq, <, >, =$
- (B)  $>, \geq, <, =, <, <$
- (C)  $\geq, \geq, \geq, \leq, >, >$
- (D)  $>, =, =, \leq, \leq, >$
- (E) Other than those given as options

**Question 3.  $M/K < U \leq M < N > O/P \geq S$**

I)  $U < S$

II)  $O \geq S$

**Question 4:  $A \geq B > C < D, E \geq B > F$**


I)  $A > E$

II)  $A \leq E$

**Question 5:  $U > V \leq W > T > K < M, M > N$**

I)  $V < M$

II)  $K > N$



~You Dream , We care. A new way of learning...

**Ambitious baba**

[Facebook Page](#)

[Facebook Group](#)

[Telegram Group](#)

### Paring question (1question)

How many such pairs of letter in the word "Transport" which has many letter between them in the English alphabet?

### Scheduling Puzzle (5 Questions)

Six person A, B, C, D, E, and F go to different city Mumbai, Jammu, Jaipur, Bangalore, Delhi and Dehradun but different days Monday, Tuesday, Wednesday, Thursday, Friday and Saturday. There are three days gap the one who goes to Jaipur and the one who goes to Jammu. F goes to Delhi just after day A. There are two days gap between F who goes to Delhi and E. D goes to Mumbai on Monday. C goes to Dehradun just before B.

Day	Person	City
Mon	D	Mumbai
Tues	A	Jammu
Wed	F	Delhi
Thus	C	Dehradun
Fri	B	Bangalore
Sat	E	Jaipur

### Circular puzzle (5 questions)

Eight persons A, B, C, D, E, F, G and H sitting around the table all are facing inside the table. Each of likes different flowers (Tubleft, Dahlia, Sunflower, Rose, Lotus, Buttercup, Blue mink and Rosy garlic). A sits third to the right of Rose. There are two persons sit between E and D who likes Louts. B does not sit neighbour of the one who likes Sunflower. B sits either left or right of the one who like Tubleft flower. G likes Rosy garlic faces F who sits immediate left of the one who likes Sunflower. C likes Tubleft flower sits immediate right of the one who likes Rose. G does neighbour of A who sits exactly between the one who likes Dahlia and the one who likes Blue mink. H likes butter cup. Neither E and D like Rose. E does not likes Dahlia.



# AB

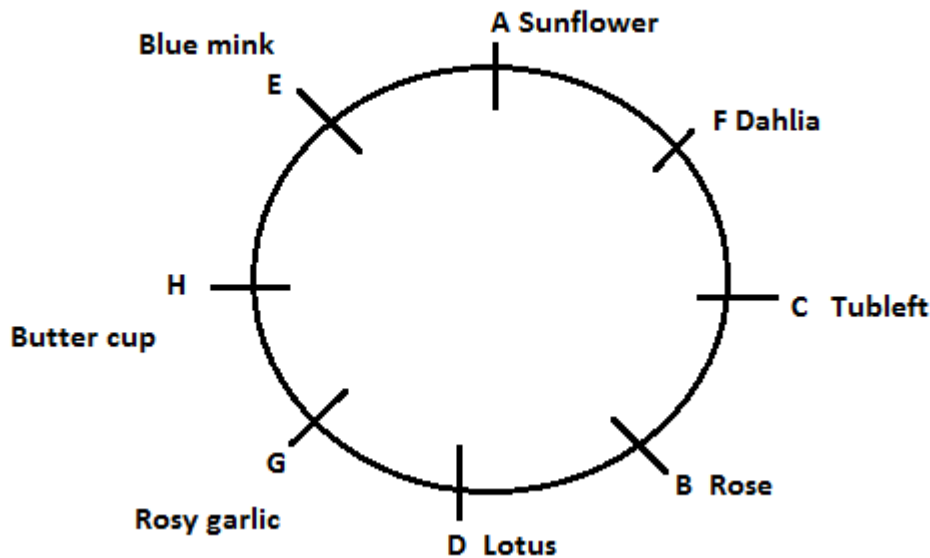
~You Dream , We care. A new way of learning...

## Ambitious baba

[Facebook Page](#)

[Facebook Group](#)

[Telegram Group](#)



**Follow our Blog for Regular Updates:- [Ambitious Baba](#)**

**Like & Follow our Facebook Page:- [Click here](#)**

**Join our Facebook Group:- [Click Here](#)**

**Telegram Group:- [Click Here](#)**

**Subscribe our YouTube channel:- [Click Here](#)**

**Follow us on Twitter:- [Click Here](#)**

**Join us on Linked In:- [Click Here](#)**

**“Thanks & Be Ambitious”**

**All the best for your Mains Exam 😊**